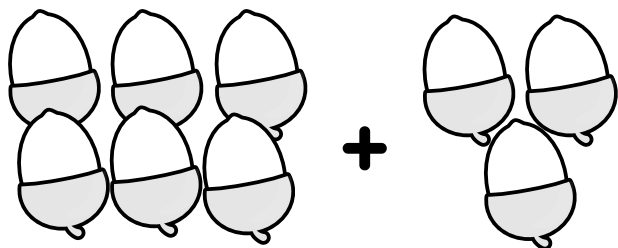



NAPISZ POPRAWNE RÓWNANIA Z DODAWANIEM I OBLICZ WYNIK!

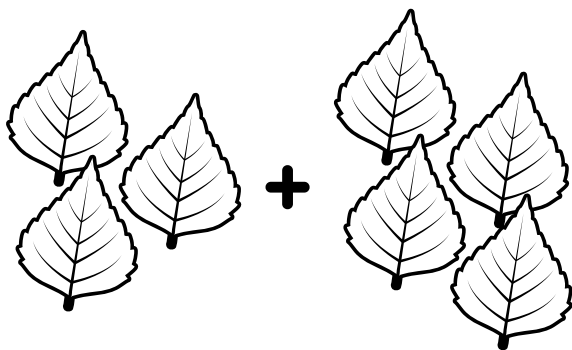
$$\square + \square = \square$$




$$\square + \square = \square$$




$$\square + \square = \square$$




$$\square + \square = \square$$



$$\square + \square = \square$$

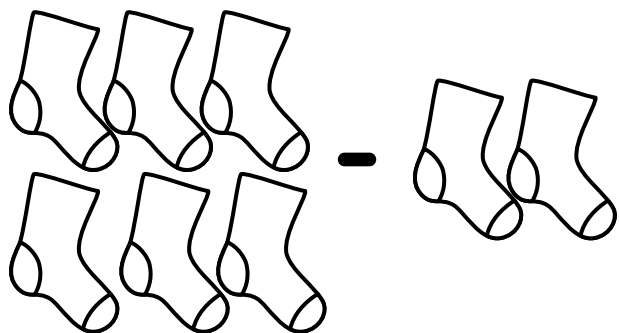


$$\square + \square = \square$$

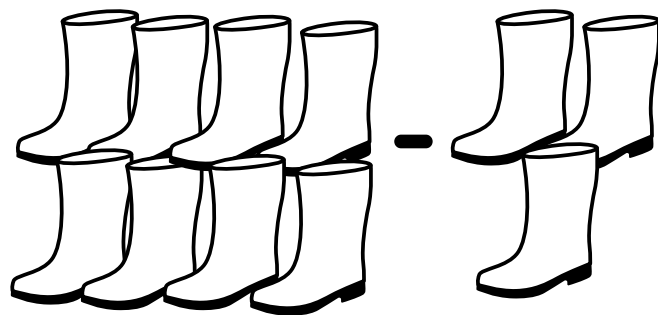


NAPISZ POPRAWNE RÓWNANIA Z ODEJMOWANIEM I OBLICZ WYNIK!


$$\square - \square = \square$$




$$\square - \square = \square$$



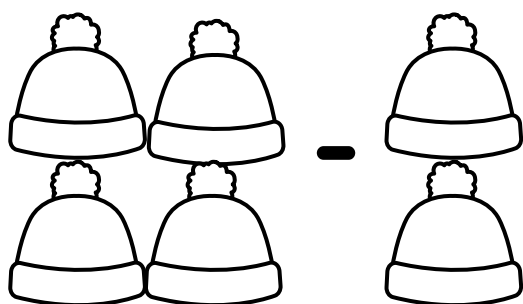
$$\square - \square = \square$$




$$\square - \square = \square$$








$$\square - \square = \square$$




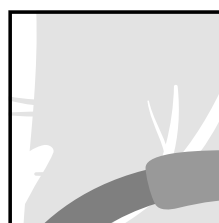

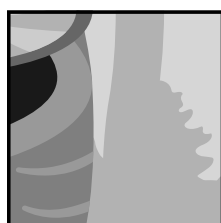

$$\square - \square = \square$$



NAUCZMY SIĘ KSZTAŁTÓW! NARYSUJ TE SAME
KSZTAŁTY I UZUPEŁNIJ WIERSZE.



NARYSUJ OKRĄG WOKÓŁ BRAKUJĄCEGO
ELEMENTU UKŁADANKI. WYTNIJ!



ROZWIĄŻ SUDOKU!

| | | | |
|---|---|---|---|
| 1 | | | 2 |
| | 3 | | 4 |
| 3 | 2 | 4 | |
| | 1 | | |

| | | | |
|---|---|---|---|
| 2 | 4 | | |
| | 3 | | 2 |
| | 2 | 3 | 1 |
| | | 2 | |

| | | | |
|--|---|---|---|
| | | 3 | |
| | 1 | 4 | 2 |
| | | | 4 |
| | | 1 | 3 |

| | | | |
|---|---|---|---|
| | 1 | 4 | 2 |
| | | 3 | |
| | | | |
| 4 | | 1 | |

